







Year 2 Maths Home Learning 13.7.2020

This week the focus is capacity:

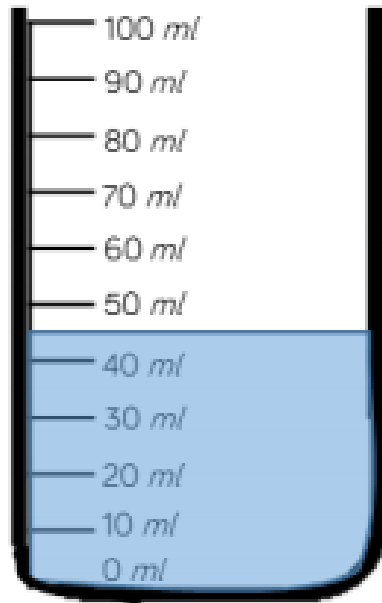
Challenge 1:

Draw the level on the scale to show the capacity of each container.

					
<p>The container's capacity is ____ ml</p>		<p>The container's capacity is ____ ml</p>		<p>The container's capacity is ____ ml</p>	

Challenge 2:

Estimate the amount of water in the container.



Explain why you have given your answer.

Challenge 3:

Show how much liquid is in each cylinder after you:

- Pour 3 litres of water into the cylinder.
- Leave 1 litre of cola in the bottle.
- Pour half of the juice into the cylinder.

